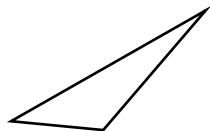


Classify Triangles

Classify each triangle as equilateral, isosceles, or scalene and as right, obtuse, or acute.



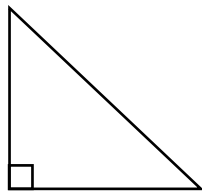
The triangle has 3 sides of unequal length.

It is scalene.

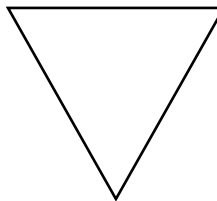
The triangle has 1 obtuse angle.

It is obtuse.

1.



2.



3.



Draw one example of each triangle described below.

4. an isosceles triangle that is also a right triangle
5. an equilateral triangle that is also an acute triangle
6. a scalene triangle that is also an obtuse triangle

Problem Solving

7. Jae Won drew a triangle. One angle is about 112° . Two of the sides measure 5 cm and 7 cm in length. The sum of the lengths of all three sides is 22 cm. What kind of triangle did Jae Won draw?
