





Tenths and Hundredths

Write a fraction and a decimal to describe each model.



Use grid paper. Draw a model to show each fraction. Then write it as a decimal.

5. $\frac{2}{10}$

6. $\frac{7}{10}$

7. $\frac{9}{10}$

8. $\frac{33}{100}$

Use grid paper. Draw a model to show each decimal. Then write it as a fraction.

9. 0.6


10. 0.2

11. 0.83

12. 0.03

Test Prep

13. Which decimal is shown in the model?



- a) 0.63 b) 0.27 c) 0.7 d) 0.73

14. Si Woo drew a model with 100 squares and 56 of the squares shaded. What fraction and decimal does the model represent?
