

Name: _____

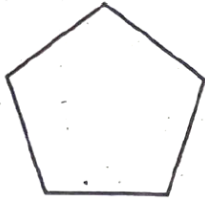
Student Number: _____

Homeroom: _____

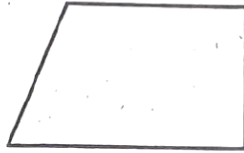
Quadrilaterals and Other Polygons

Name each polygon. If the polygon is a quadrilateral, write all names that apply.

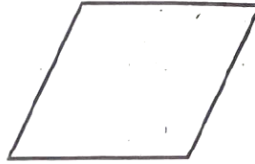
1.



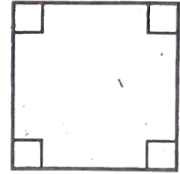
2.



3.



4.



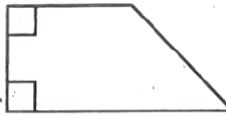
5.



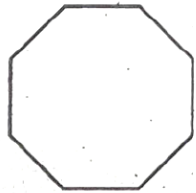
6.



7.

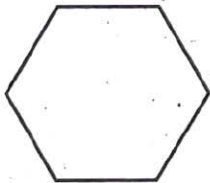


8.



Tell if each figure is a polygon or not. For a polygon, tell if it appears to be regular or irregular.

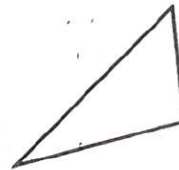
9.



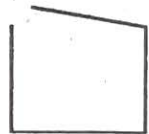
10.



11.

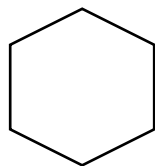


12.



Test Prep

13. What kind of shape is shown?



- a) quadrilateral c) irregular triangle
b) regular hexagon d) regular octagon

14. What is another name for a regular quadrilateral?
