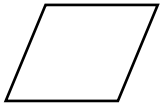


Quadrilaterals and Other Polygons

Name each polygon. If the polygon is a quadrilateral, write all names that apply.

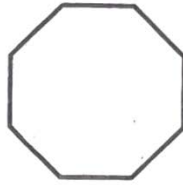


The polygon is a quadrilateral.

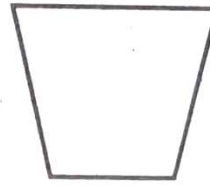
It has opposite sides parallel and four sides the same length.

It is a parallelogram and a rhombus.

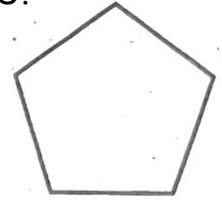
1.



2.

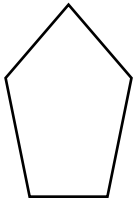


3.

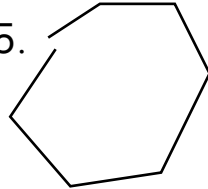


Tell if each figure is a polygon or not. For a polygon, tell if it appears to be regular or irregular.

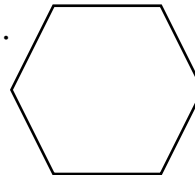
4.



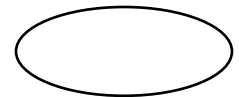
5.



6.



7.



Problem Solving

8. Yeo Jin drew a shape with four sides. Two of the sides were parallel. The other two sides were not parallel. What kind of shape did Yeo Jin draw?