

Name: _____

Student Number: _____

Homeroom: _____

Angles in Real Life

1. Do any of the lines in each letter below create a right (90°) angle. Write *yes* or *no*.

a. T _____

b. A _____

c. Y _____

d. E _____

e. L _____

f. X _____

2. Do any of the lines in each letter below create an acute ($<90^\circ$) angle. Write *yes* or *no*.

a. V _____

b. F _____

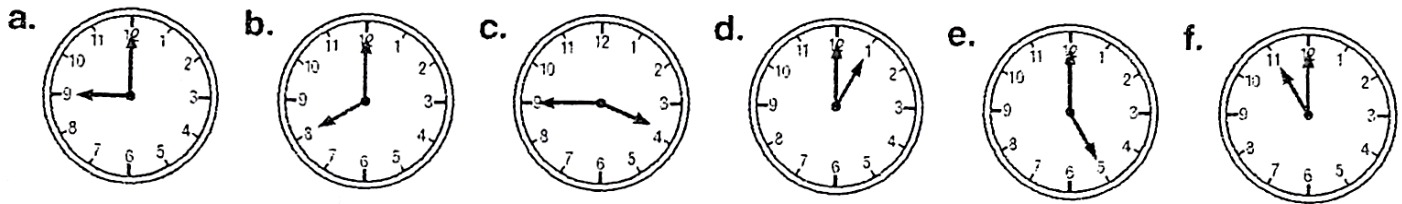
c. N _____

d. Z _____

e. H _____

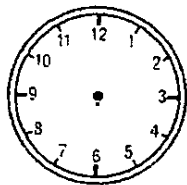
f. M _____

3. Color the clock faces on which the hands make an angle equal to or less than 90° .

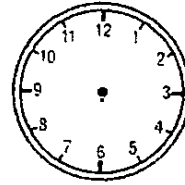


4. Draw hands on the clock to show times that represent the following angles.

b. 90°



a. 180°




Test Prep

5. Draw each of the following angles using the starting lines.

a. greater than 45°




b. less than 180°



c. equal to 90°



d. greater than 180°



e. less than 90°



f. less than 45°

